

MOVEMENT



Learning Goals

- Build knowledge about coding and robotics by coding a robot to make it move.
- Read, debug, and alter code to make a robot move forward and backward.
- Have FUN learning!



MOVEMENT

Did you review the Getting Started document?

Do you have the Robocar with the EV3 attached?
Is the EV3 turned on?

Is the LEGO EV3 Classroom app open and on screen?
Is the EV3 connected and ready to use?

Do you know how to download programs to the EV3 and
select programs from the EV3?



MOVEMENT

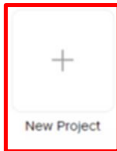


Start Here

Get familiar with EV3 in three fun activities!

START

Recent projects



← Click the New Project button.

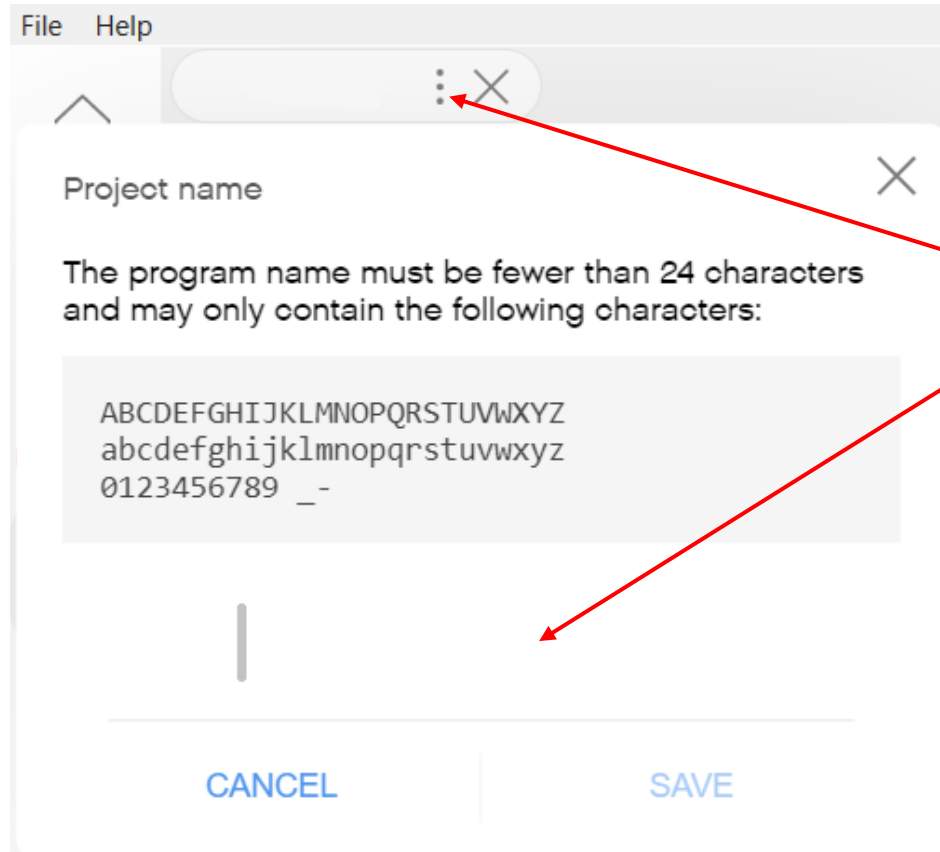
Unit Plans



Core Set Models



MOVEMENT



Name your program.

- Click the three dots.
- In the project name window type:

Move- _____
(your names).



MOVEMENT



The Robocar motors that make it move are connected to ports B and C.

If for some reason the motors are not connected to ports B and C, please let Mr. Desmond know.

* EV3 - 2

Port C malfunctioning.
Use Ports A and D instead.



MOVEMENT

Robot Movement - Exploration 1

Activity Goals

- 1) To explore how to make a robot move for a certain number of seconds.
- 2) To investigate and compare the differences in how far a robot will travel as the travel time changes.
- 3) To explore the relationship between time, speed, and distance as they relate to robot movement.



MOVEMENT

Robot Movement - Exploration 1

Activity Steps

- 1) Create a chart to record Exploration 1 data. [Chart](#)
- 2) Create a code sequence to move the Robocar. [Code](#)
- 3) Exploration 1 testing setup check-in. [Setup Check-in](#)
- 4) Read the Exploration 1 testing instructions. [Instructions](#)
- 5) Download your code and complete the testing. [Test](#)
- 6) Think about your Exploration 1 results. [Think](#)
- 7) Answer question and explain your ideas. [Explain](#)

MOVEMENT

Robot Movement - Exploration 1

On a piece of paper create a copy of this chart to record your findings for how far the Robocar travels.

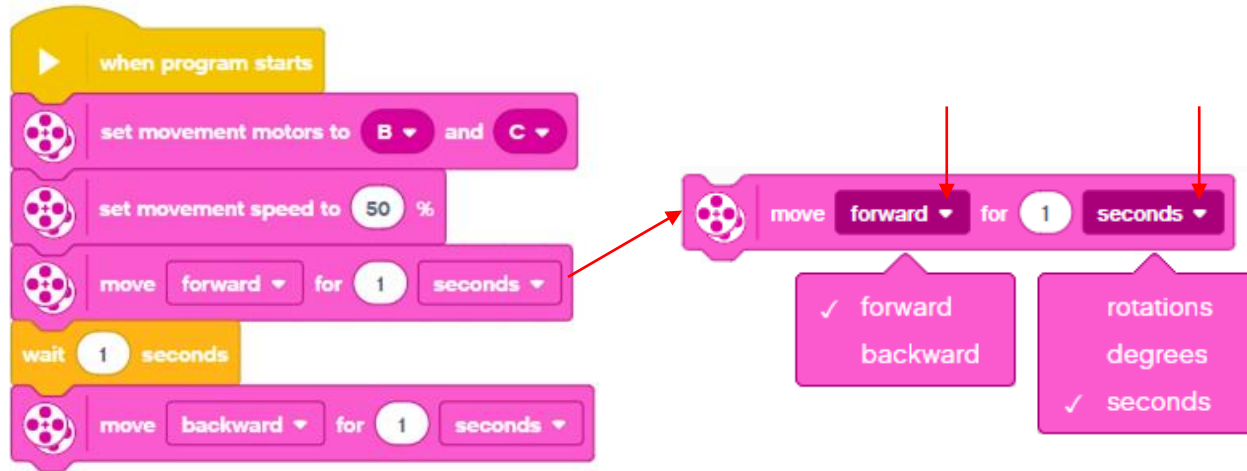
Movement Exploration 1		
Speed (%)	Time (s)	Distance (cm)
50 %	1 s	cm
50 %	2 s	cm
50 %	4 s	cm



MOVEMENT

Robot Movement - Exploration 1

Create a code sequence to have the Robocar move forward for one second and then backward for one second.




Do not download or run your code yet.



MOVEMENT

Robot Movement - Exploration 1

Get a 100 centimeter ruler. Position the ruler across the long side of the table so that the Robocar is ready to move without crashing or falling off the table.



For consistent measurements always use the location of the Robocar's wheel axle (the center-point of the wheel).



Position the Robocar's wheel axle even with zero on the ruler.

Check in with Mr. Desmond.



MOVEMENT

Robot Movement - Exploration 1

Read all of the following instructions.

1) Measure how far forward the Robocar travels at 50% speed for 1 second. Record your findings in your chart.

2) Change the time in your code to 2 seconds.

Measure how far forward the Robocar travels at 50% speed for 2 seconds. Record your findings in your chart.


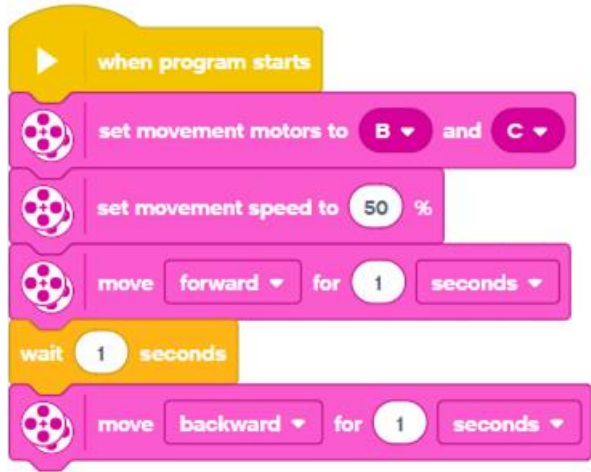
3) Change the time in your code to 4 seconds.

Measure how far forward the Robocar travels at 50% speed for 4 seconds. Record your findings in your chart.




MOVEMENT

Robot Movement - Exploration 1



Download the program to the EV3.
Run your program from the EV3.



Begin the testing. Complete each test twice.



MOVEMENT

Robot Movement - Exploration 1

Think about the travel difference between 1 second, 2 seconds, and 4 seconds.



Discuss any general patterns about how far the Robocar travelled that you noticed.

[Sometimes rounding numbers helps us to see general patterns.]

Check in with Mr. Desmond.

Be prepared to show your completed chart.



MOVEMENT

Robot Movement - Exploration 1

Think about it, discuss your ideas as a group, and then write your answers on your paper below your chart.



- 1) Look at the results recorded in your chart.
What did you notice about the distance the Robocar travelled as the time increased?
- 2) Based on your results how far do you think the Robocar will travel at 50% speed for 6 seconds?
- 3) Think about the time it takes to move a certain distance.
Explain how time affects the distance an object will travel.



MOVEMENT

Robot Movement - Exploration 1

Check in with Mr. Desmond.

Be prepared to show your work and discuss your ideas.



MOVEMENT

Robot Movement - Exploration 2

Activity Goals

- 1) To explore how to make a robot move at a certain speed.
- 2) To investigate and compare the differences in how far a robot will travel as the speed changes.
- 3) To explore the relationship between time, speed, and distance as they relate to robot movement.



MOVEMENT

Robot Movement - Exploration 2

Activity Steps

- 1) Create a chart to record Exploration 2 data. [Chart](#)
- 2) Create a code sequence to move the Robocar. [Code](#)
- 3) Exploration 1 testing setup check-in. [Setup Check-in](#)
- 4) Read the Exploration 1 testing instructions. [Instructions](#)
- 5) Download your code and complete the testing. [Test](#)
- 6) Think about your Exploration 1 results. [Think](#)
- 7) Answer question and explain your ideas. [Explain](#)

MOVEMENT

Robot Movement - Exploration 2

Create a copy of this chart to record your findings for how far the Robocar travels.

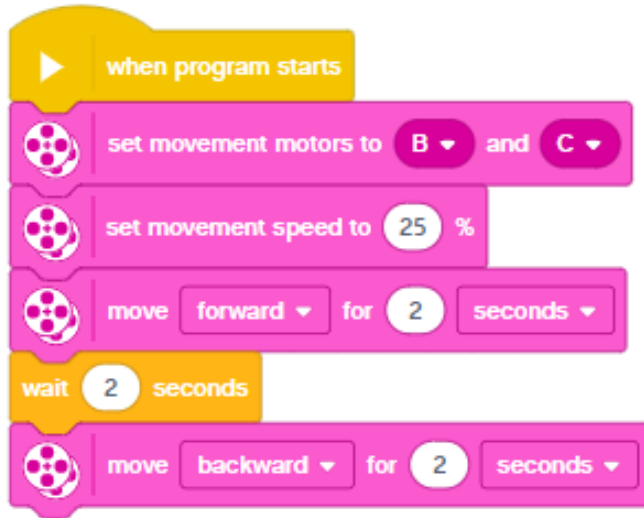
Movement Exploration 2		
Speed (%)	Time (s)	Distance (cm)
25 %	2 s	
50 %	2 s	
75 %	2 s	



MOVEMENT

Robot Movement - Exploration 2

Create a code sequence to have the Robocar move at 25% speed forward for two seconds and then backward for two seconds.




Do not download or run your code yet.



MOVEMENT

Robot Movement - Exploration 2

Get a 100 centimeter ruler. Position the ruler across the long side of the table so that the Robocar is ready to move without crashing or falling off the table.



For consistent measurements always use the location of the Robocar's wheel axle (the center-point of the wheel).



Position the Robocar's wheel axle even with zero on the ruler.

Check in with Mr. Desmond.



MOVEMENT

Robot Movement - Exploration 2

Read all of the following instructions.

1) Measure how far forward the Robocar travels at 25% speed for 2 seconds. Record your findings in your chart.

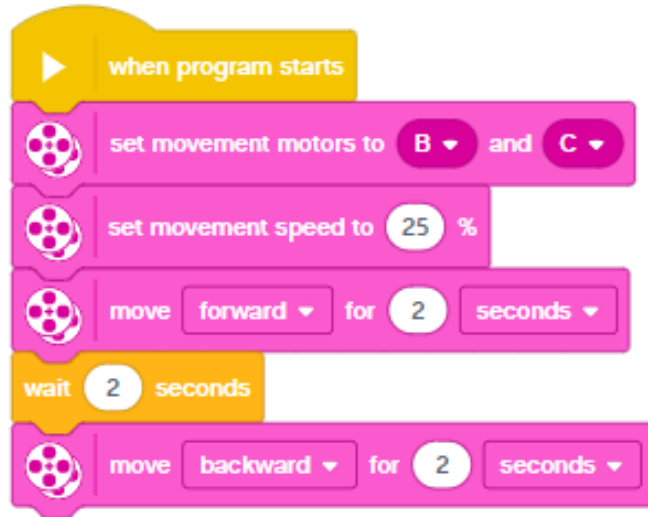
2) Change the speed in your code to 50% speed. Measure how far forward the Robocar travels at 50% speed for 2 seconds. Record your findings in your chart.

3) Change the speed in your code to 75% speed. Measure how far forward the Robocar travels at 75% speed for 2 seconds. Record your findings in your chart.




MOVEMENT

Robot Movement - Exploration 2



Download the program to the EV3.



Begin the testing. Complete each test twice.



MOVEMENT

Robot Movement - Exploration 2

Think about the travel difference between 25% speed, 50% speed, and 75% speed.



Discuss any general patterns about how far the Robocar travelled that you noticed.

[Sometimes rounding numbers helps us to see general patterns.]

Check in with Mr. Desmond.

Be prepared to show your completed chart.



MOVEMENT

Robot Movement - Exploration 2

Think about it, discuss your ideas as a group, and then write your answers on your paper below your chart.

- 1) Look at the results recorded in your chart.
What do you notice about the distance the Robocar travelled as the speed increased?
- 2) Explain how the speed of a moving object affects how far it will travel.



MOVEMENT

Robot Movement - Exploration 2

Check in with Mr. Desmond.

Be prepared to show your work and discuss your ideas.



MOVEMENT

Robot Movement - Consider This

There tends to be common thinking about movement. Whether walking, bicycling, driving a car, travelling by train or air, people almost always think about how much time will it take to complete the journey.


An understanding of the relationships between time, speed, and distance is important when working with robotic systems that move. Robotic movement takes many forms: for example, a robot that moves around a series of obstacles, or a robot arm that moves to perform an action. How much robotic systems move (distance) is related to the time spent moving and the speed of movement.



MOVEMENT

Robot Movement - Consider This

When the motor runs it is the motor spindle that is moving (spinning). The Robocar's wheels are attached to the motor spindle. That means the wheels spin at the same time and at the same rate as the spindle.



When the motor runs the spindle moves for a certain duration as controlled by the coding. For example, if we were to code the Robocar's motors to move for 3 rotations each motor spindle would spin in a full circle three times.



MOVEMENT

Robot Movement - Consider This

Time is a very useful duration unit when determining the distance (movement) of robotic systems that move about like the Robocar.

Degrees and rotations can be very useful when working with fine, precise, or exact movements such as the movement of a robotic arm.



MOVEMENT CHALLENGES

Learning Goals

- Build knowledge about coding and robotics by coding a robot to make it move.
- Independently create code to make a robot move forward and backward.
- Have FUN learning!



MOVEMENT CHALLENGES

Challenge 1 - Mixed-up Forward Challenge

Program the Robocar using seconds as the duration unit to move forward 40 cm, play a beep sound effect, move backwards 15 cm, play a beep sound effect, and then move forward 25 cm.

You are expected to demonstrate your success to Mr. Desmond - showing both the robot in action and the code.

